








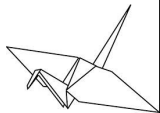
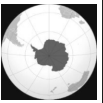





# WORLD GEOGRAPHY 2



1. Look at the elephant. From which continent is this elephant? \_\_\_\_\_ 
2. In what ocean are Tahiti and Fiji? \_\_\_\_\_ 
3. In which hemisphere are musk ox found? \_\_\_\_\_ 
4. Would spring cherry blossoms in Japan be apparent in April or December? \_\_\_\_\_
5. Look. Is this famous French cathedral on the Seine River or the Nile River? \_\_\_\_\_ 
6. Is a grizzly bear's diet dominated by meat or plants and berries? \_\_\_\_\_
7. If Shinto and wearing a 'kimono', what nationality might you be? \_\_\_\_\_ 
8. Is flying time around the world at the Equator approximately 45 hours or 145 hours? \_\_\_\_\_
9. In which country would a Sumatran tiger be found? \_\_\_\_\_
10. Look at the map outline. Name this largest country (area) in the world. \_\_\_\_\_ 
11. What is the world's 2nd largest river (after the Amazon) by water volume? \_\_\_\_\_
12. True or False? Coniferous forest covers the North Pole. \_\_\_\_\_ 
13. Which continent is south of South America? \_\_\_\_\_
14. In Rio de Janeiro, Brazil, what is the main language spoken? \_\_\_\_\_ 
15. Look at the scene. With which continent would this scene be associated? \_\_\_\_\_
16. In a rainbow, what colour lies between yellow and blue? \_\_\_\_\_
17. How many degrees of longitude equate to one hour in time? \_\_\_\_\_ (360°/24 hours) 
18. Which South American country's name is similar to the term, 'Equator'? \_\_\_\_\_
19. True or False. Permanently snow-capped mountains lie on or near the Equator? \_\_\_\_\_
20. Look at the craft-work. What is the Japanese art of paper folding called? \_\_\_\_\_ 
21. In geography, what is an 'atoll'? \_\_\_\_\_
22. From which continent do most people depart if visiting Antarctica? \_\_\_\_\_ 
23. What is Africa's highest mountain? \_\_\_\_\_
24. In geography, what are 'mesas and buttes'? \_\_\_\_\_ 
25. Look at the pirate. Name the sea where 'buccaneers' (pirates) adventured. C \_\_\_\_\_



HELP DESK

|                   |   |            |   |          |  |                  |   |          |
|-------------------|---|------------|---|----------|--|------------------|---|----------|
| 15                |  | Portuguese |  | Northern |  | South America    |  | April    |
| Indonesia         | Antarctica  | Japanese   | Plants and Berries  | Africa   | Ecuador  | Africa           | Pacific   | 45 hours |
| Caribbean         | Green   | Russia     | Congo River   | True     |  | Ring shaped reef | Origami!  | Seine    |
| Desert formations | False   |            |   |          |  |                  |   |          |
| Mt Kilimanjaro    |  |            |  |          |  |                  |  |          |

roy g biv