















# KNOWLEDGE OF AUSTRALIA 4




- Look. Is the crocodile a saltwater crocodile or a freshwater crocodile? \_\_\_\_\_ 
- Is the Pacific Ocean to the east or west of the Australian continent? \_\_\_\_\_
- If crossing the Nullarbor on the Indian Pacific, in which direction is Darwin? \_\_\_\_\_ 
- Which state of Australia has ten letters in its name? \_\_\_\_\_
- Look at the building. Name this well known landmark in Australia. \_\_\_\_\_ 
- Name 2 east coast capital cities. \_\_\_\_\_ 
- In the 'Top End, is November to April the wet season or the dry season? \_\_\_\_\_ 
- What do Aboriginals call a device used to throw a spear faster/further? \_\_\_\_\_
- In which state of Australia is the town of 1770? \_\_\_\_\_
- Look. What is the name of this plant, the floral emblem of N.S.W.? \_\_\_\_\_ 
- What mountain range divides inland Australia from the eastern seaboard? \_\_\_\_\_
- Is the distance from Sydney to Adelaide greater than or less than 1000km? \_\_\_\_\_ 
- Should you travel west or east on the Great Ocean Road to get to Melbourne? \_\_\_\_\_
- Which east flowing river was harnessed by the Snowy Mountains Scheme? \_\_\_\_\_
- Look at the map. Is the line of longitude marked X, 10°W or 120°E \_\_\_\_\_ 
- In Queensland, does more rain fall in winter or summer? \_\_\_\_\_ 
- Is the highest average annual rainfall in Australia (Tully, QLD) 4000mm or 400mm p.a.? \_\_\_\_\_ mm
- What is Australia's most popular destination for tourists? \_\_\_\_\_ 
- In which season do both Adelaide and Perth receive the most rainfall? \_\_\_\_\_
- Look at the Wandjina style rock art. Is it located in the Kimberley or Kakadu? \_\_\_\_\_ 
- In road distance and flying time, is Sydney closer to Brisbane or Melbourne? \_\_\_\_\_
- True or False. Overnight temperatures at Uluru in July may be colder than Melbourne. \_\_\_\_\_
- What is the 3rd longest river in Australia behind the Murray and Murrumbidgee Rivers? \_\_\_\_\_
- Is Perth's 'Freemantle Doctor' a south westerly wind or a northerly wind? \_\_\_\_\_
- Look. In which Australian capital city is this railway station? \_\_\_\_\_ 



Woomera  
Queensland  
Waratah  
Greater  
Winter

North  
Queensland  
Kimberley  
South Westerly  
Melbourne



Summer  
Darling  
Snowy  
120°E  
True

Sydney (Harbour)  
Great Dividing Range  
East  
Sydney/Brisbane  
Saltwater  
East

Wet Season  
Melbourne  
4000mm  
Parliament House  
East