















# Australia Map States & Territories



	1. In which state or territory is the 'Top End'? _____	
	2. What is Australia's largest state by area? _____	
	3. Which state is referred to as the Sunshine State? _____	
	4. What reef is located in North Queensland? _____	
	5. In which largest state would you seek wildflowers? _____	
	6. In what direction is Uluru from the Great Australian Bight? _____	
	7. In which state is Ningaloo Reef? _____	
	8. Which state has the waratah as a state flower? _____	
	9. What appears to be the driest state in Australia? _____	
	10. In which state are the Snowy Mountains? _____	
	11. In which state is the M.C.G.? _____	
	12. What is the distance across South Australia? _____	
	13. The Gulf of Carpentaria adjoins which territory? _____	
	14. Which state has the Tasmanian Devil as a state emblem? _____	
	15. In which state is Cape York? _____	