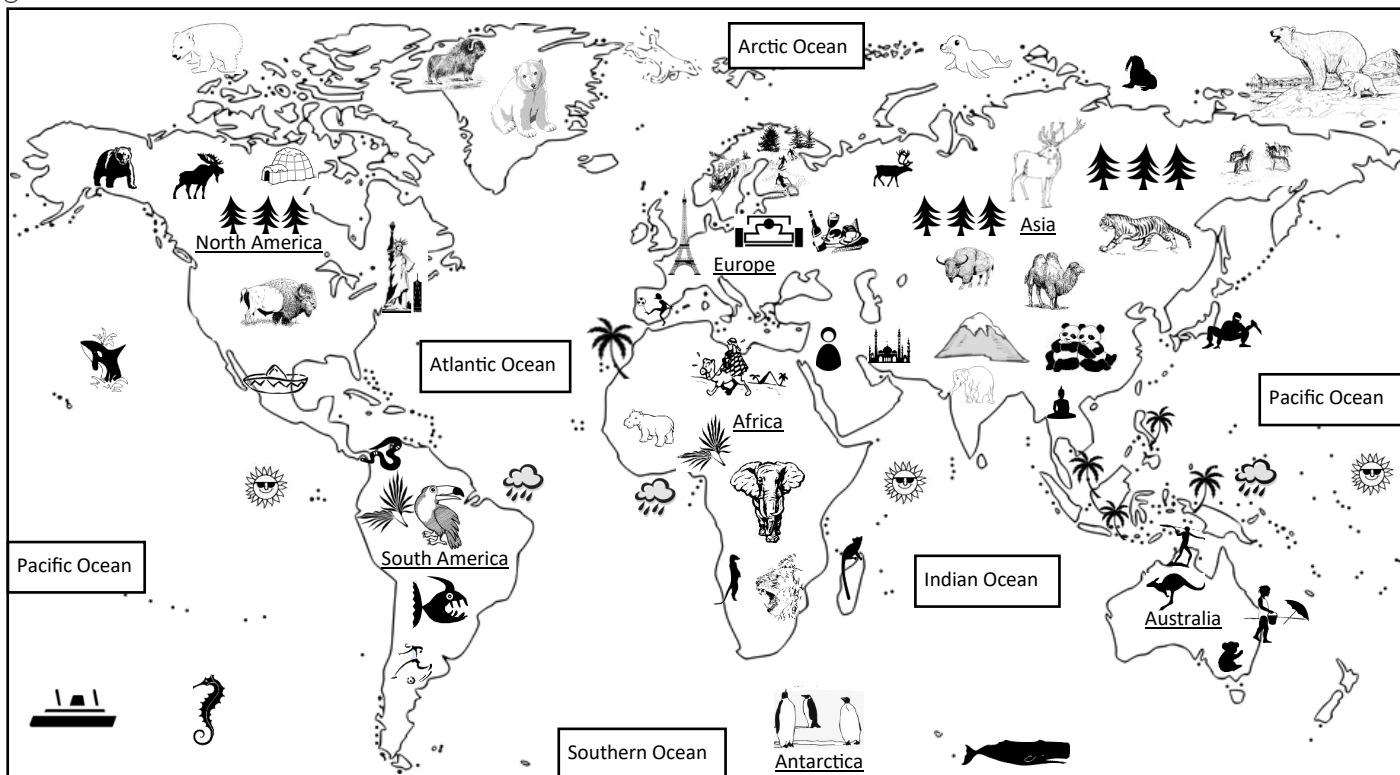

















World Map

Continents & Oceans



	1. How many continents e.g. <u>North America</u> , are on the map? _____	
Himalayas	2. How many oceans e.g. <u>Indian Ocean</u> , are on the map? _____	Tiger
	3. Which ocean is east of Asia and west of North America? _____	
Reindeer	4. In which continent would you find tigers? _____	African Elephant
	5. Around which ocean do polar bears live? _____	
Bison	6. Piranhas and toucans are found in which continent? _____	Beaches
	7. Name the ocean south of the Himalayas. _____	
Eskimo Igloo	8. Which continent is best known for Eskimos? _____	F1 Europe
	9. In which 2 continents is coniferous forest abundant? _____	
Toucan	10. Which continent is renowned for beaches? _____	Buddhism
	11. Name 3 animals found in North America. _____	
Piranha	12. On which continent would you find the Egyptian Pyramids? _____	Antarctica
	13. In which continent is Formula 1 motor sports based? _____	
	14. Which two continents have elephants? _____	
	15. In which continent is Buddhism a popular religion? _____	

	Asia	Africa	South America	Asia/North America	Pacific
HELP DESK	Africa/Asia	Bison/Moose/Bear	Arctic	North America	Four
	Europe	Australia	Asia	Indian	Seven