



NATIONS OF THE WORLD



Bonjour

FRANCE

Bonjour

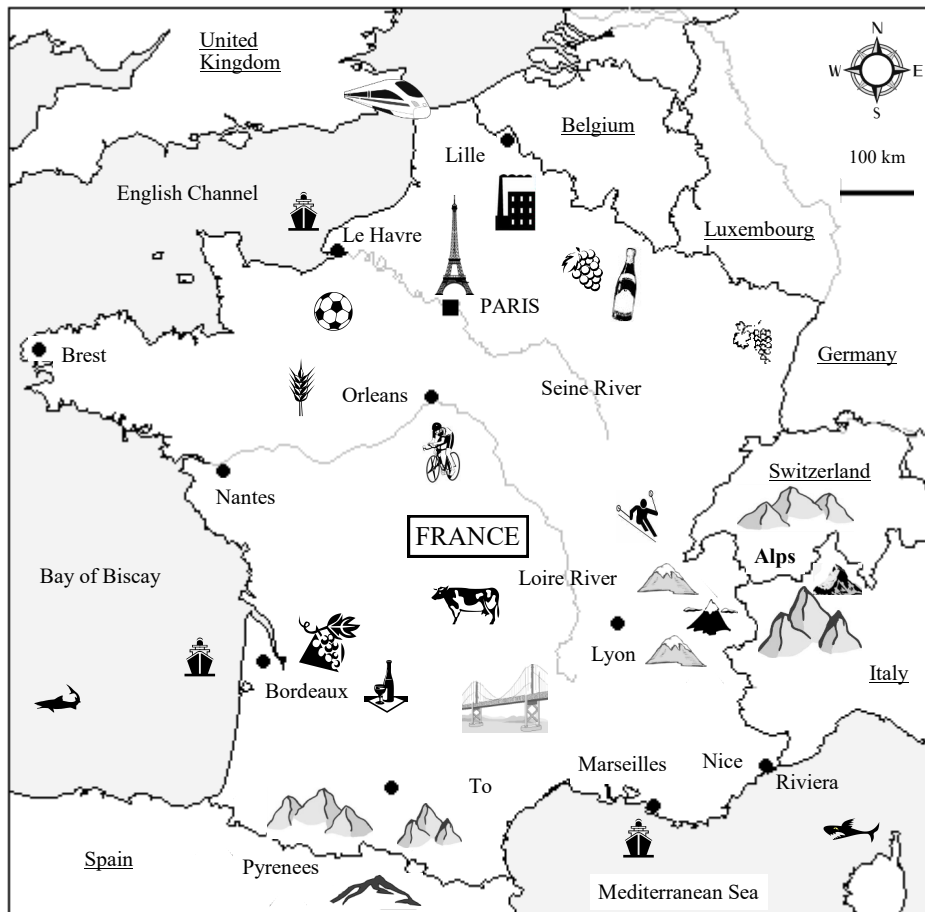
Europe



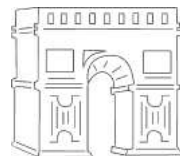
France



France



European Alps




Paris



English Channel



Riviera



Paris Metro

MAP STUDY - FRANCE

Using the information answer the following questions

1. In which continent is the country of France? _____
2. What sea lies to the south of France? _____
3. What is the capital city of France? P _____
4. Name the mountains to the east of France. A _____
5. What separates France and the United Kingdom? _____
6. What is the longest river in France? L _____
7. Name the mountains that separate France and Spain. P _____
8. On what river is the capital city of Paris? S _____
9. Which French city is on the Riviera? N _____
10. Which 2 countries on the map share the European Alps? I _____ S _____
11. What large bay lies to the west of France? _____
12. On what sea is the Riviera? _____
13. Which other country shares the Riviera with France? _____
14. What is the largest city on the Mediterranean coast? M _____
15. Which city lies at the mouth (end) of the Seine River? _____
16. Name this country on France's northern border. B _____
17. Which city in France is furthest west? _____
18. Which city in central France is on the Loire River? _____
19. Which French city is on the border with Belgium? _____
20. What do you think might be grown near the city of Bordeaux? _____

