
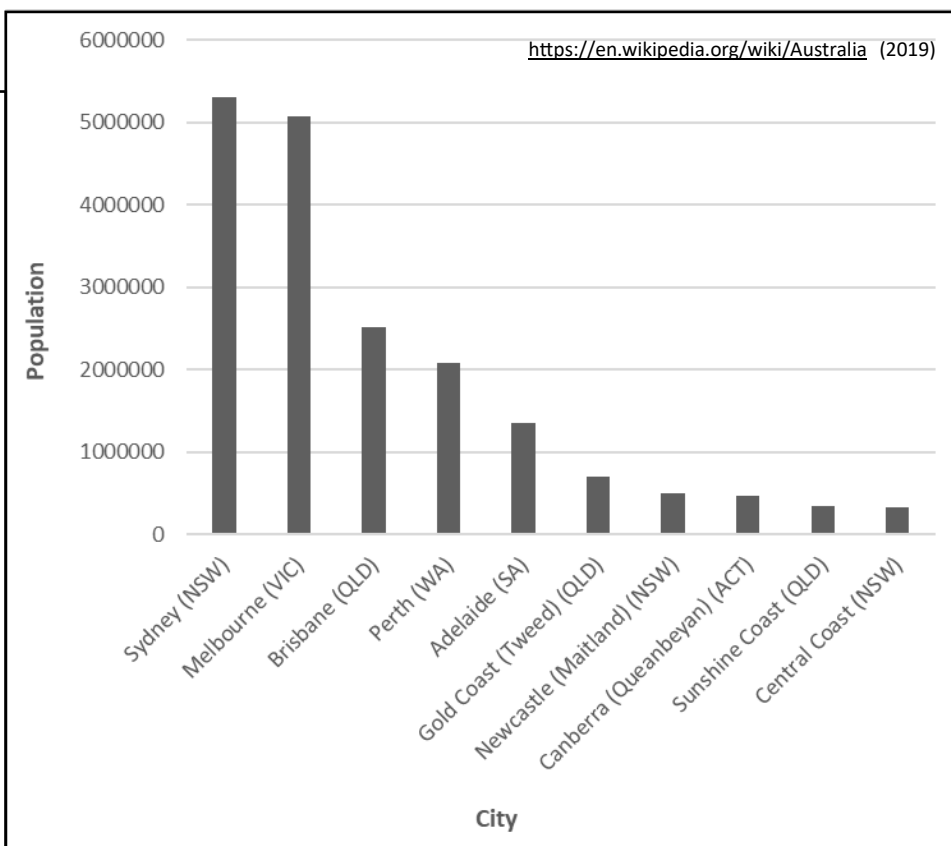


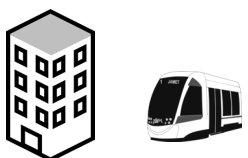


SKILLS in GEOGRAPHY

Australia's Population - 10 Largest Cities



Instruction: Using the information available, list Australia's largest 10 cities in order of population size. Include the population of each city to the nearest '000

	CITY	POPULATION																					
 <p>Names of the Cities (Alphabetical) (Abbreviated)</p> <table border="1"> <tr><td>Adelaide (SA)</td></tr> <tr><td>Brisbane (QLD)</td></tr> <tr><td>Canberra (ACT)</td></tr> <tr><td>Central Coast (NSW)</td></tr> <tr><td>Gold Coast (QLD/NSW)</td></tr> <tr><td>Melbourne (VIC)</td></tr> <tr><td>Newcastle (NSW)</td></tr> <tr><td>Perth (WA)</td></tr> <tr><td>Sunshine Coast (QLD)</td></tr> <tr><td>Sydney (NSW)</td></tr> </table>	Adelaide (SA)	Brisbane (QLD)	Canberra (ACT)	Central Coast (NSW)	Gold Coast (QLD/NSW)	Melbourne (VIC)	Newcastle (NSW)	Perth (WA)	Sunshine Coast (QLD)	Sydney (NSW)	1.		 <p>Population Nearest '000 Smallest to Largest</p> <table border="1"> <tr><td>335000</td></tr> <tr><td>341000</td></tr> <tr><td>462000</td></tr> <tr><td>491000</td></tr> <tr><td>693000</td></tr> <tr><td>1359000</td></tr> <tr><td>2085000</td></tr> <tr><td>2514000</td></tr> <tr><td>5078000</td></tr> <tr><td>5312000</td></tr> </table>	335000	341000	462000	491000	693000	1359000	2085000	2514000	5078000	5312000
	Adelaide (SA)																						
	Brisbane (QLD)																						
	Canberra (ACT)																						
	Central Coast (NSW)																						
	Gold Coast (QLD/NSW)																						
	Melbourne (VIC)																						
	Newcastle (NSW)																						
	Perth (WA)																						
	Sunshine Coast (QLD)																						
Sydney (NSW)																							
335000																							
341000																							
462000																							
491000																							
693000																							
1359000																							
2085000																							
2514000																							
5078000																							
5312000																							
2.																							
3.																							
4.																							
5.																							
6.																							
7.																							
8.																							
9.																							
10.																							